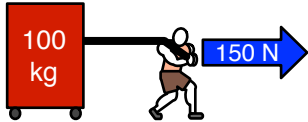
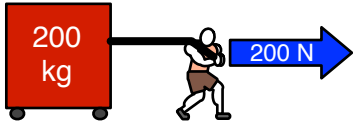


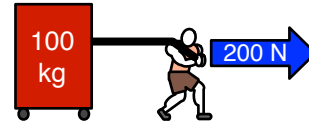

# FORCE VS MASS (A)

In each situation, calculate which one changes speed the quickest.  
Show the calculation!

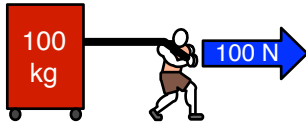
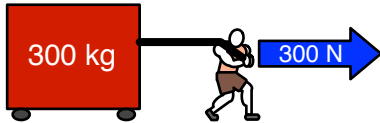
SITUATION #1



SITUATION #2



SITUATION #3



SITUATION #4

